

BREAK APART

Use the model to create an addition sentence.
Record answers in your book.

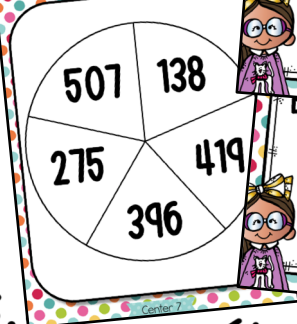
$$\begin{array}{r} 212 + 685 = ___ \\ \begin{array}{r} 600 \\ 85 \\ 805 \end{array} \end{array}$$

$812 + 80 = 892$
 $892 + 5 = 897$

SPIN TO ADD

First, record the number from the card in your book.
Then, use the spinner to record your second number. Last, find the sum of the two.

SPIN TO ADD



A. 267

Center 7

B. 534

Center 7

's 3-DIGIT ADDITION MATH CENTERS



WORD PROBLEM A

Jim's family traveled 452 miles on Tuesday. They traveled 279 more miles the next day. How many miles did they travel during the two days?

Center 2

NUMBER LINE




316 416 516 526 536 542

$$316 + 226 = 542$$

Use the number line in your book to add hundreds, tens, then ones.

NUMBER LINES A

$$579 + 216$$



MISSING NUMBERS

Use the workspace in your booklet to find the missing number. Record the completed facts in your book.

Center 8




$$278 + 6 \square 1 = 909$$



Student recording book designed to save paper and allows student choice to complete the ten centers in any order they wish.

1 MATH JOURNAL



MATH JOURNAL

Read the question carefully.
Use words, numbers and
pictures to show your answer.
Be sure to write in


The 2nd grade classes collected cans for the food drive. Mr. Johnson's class brought in 326 cans. Mrs. Sears' class brought 287 cans. Aaron says they collected 613 cans, but Ashley said there were 603 cans. Who is correct? How did one of the friends make a mistake?
Explain how you know.

Center 1



THE SUM IS... A

807



THE SUM IS... B

983

Center 9

$184 + 472$

$235 + 236$

$238 + 569$



9 THE SUM IS...

A.	B.	C.
D.	E.	F.
G.	H.	


THE SUM IS...

Match the expressions with the sum.

Write the number sentence in your book.



 $238 + 569 = 807$

Center 9




Several different matching sorts are included

5 EXPANDED FORM

A. hund tens ones

$$\begin{array}{r} _ + _ + _ \\ \square + \square + \square = \square \end{array}$$

B. hund tens ones

$$\begin{array}{r} _ + _ + _ \\ \square + \square + \square = \square \end{array}$$

C. hund tens ones

$$_ + _ + _$$

D. hund tens ones

$$_ + _ + _$$

EXPANDED FORM

Rewrite in expanded form.
Add the hundreds. Add the tens. Add the ones. Find the sum of all

$$\begin{array}{r} 213 + 400 \\ 200 + 10 + 3 + 400 \\ 600 \end{array}$$

EXPANDED FORM F

$$\begin{array}{r} 479 \\ + 425 \\ \hline \end{array}$$

EXPANDED FORM A

$$\begin{array}{r} 257 \\ + 439 \\ \hline \end{array}$$

4 TRUE OR FALSE

A.

B.

C.

D.

TRUE OR FALSE

Use the True/False Cards to help sort into piles. Determine if the problems are correctly added. Record in your book.

False

True

Center 4

A.

$$\begin{array}{r} 517 \\ + 363 \\ \hline 870 \end{array}$$

B.

$$\begin{array}{r} 245 \\ + 696 \\ \hline 941 \end{array}$$

Each center has a fun and engaging way for students to review their math skills

5 EXPANDED FORM

A.	hund tens ones	B.	hund tens ones
$\underline{\quad} + \underline{\quad} + \underline{\quad}$ $\square + \square + \square = \square$	$\underline{\quad} + \underline{\quad} + \underline{\quad}$ $\square + \square + \square = \square$		
C.	hund tens ones	D.	hund tens ones
$\underline{\quad} + \underline{\quad} + \underline{\quad}$ $\square + \square + \square = \square$	$\underline{\quad} + \underline{\quad} + \underline{\quad}$ $\square + \square + \square = \square$		

EXPANDED FORM

Rewrite in expanded form. Add the hundreds. Add the tens. Add the ones. Find the sum of all the addends.

21

$$200 + 10 + 3$$

EXPANDED FORM E

663

158

Center 5

EXPANDED FORM H

238

+ 367

Center 5

4 TRUE OR FALSE

A.	B.
C.	D.

TRUE OR FALSE

Use the True/False Cards to help sort into piles. Determine if the problems are correctly added. Record in your book.

Center 4

F.

$$\begin{array}{r} 588 \\ + 448 \\ \hline 936 \end{array}$$

G.

$$\begin{array}{r} 292 \\ + 385 \\ \hline 677 \end{array}$$

False

True



Black and white versions of each center also included