

MISSING FACTOR

Match the equation with the number card that makes it true. Record the equations in your book.

Center 8

A. $9 \times \underline{\quad} = 117$

B. $4 \times \underline{\quad} = 340$

17

85


13

WORD PROBLEM A

There are 128 animals at the zoo and 8 zoo keepers. If each zookeeper takes care of an equal number of animals, how many animals will one zookeeper care for?

Center 2

's DIVISION MATH CENTERS



VOCABULARY

Match the vocabulary words with the correct definition. Write the definitions in your recording book.

Center 7

REMAINDER SORT

Sort the equation under the correct remainder. Write the equations in the chart in your recording book.

R2

R6

R4

$$47 \div 9 =$$

$$88 \div 6 =$$

Quotient

the solution to a division problem

1 MATH JOURNAL

A.


B.

MATH JOURNAL

Read the question carefully.
Use words and numbers to
Write in
ences.

MATH JOURNAL A


Amelia says that 100 is
divisible by 12. Is she
correct?
Prove
using a



MATH JOURNAL B

What is a remainder? Use
words to explain and use
numbers to show an
example of a division
equation that has a
remainder.

Center 1



A constructive response math journal prompt is included. The question asks students to use a picture and explain the reasoning for their answer.

LONG DIVISION

Match the equation with the quotient that makes the equation true. Record the equations in your book.

Center 9

9 LONG DIVISION

A.

B.

C.

120

C. $270 \div 5 = \underline{\quad}$

A. $224 \div 8 = \underline{\quad}$

28

B. $840 \div 7 = \underline{\quad}$

320

D. $1,920 \div 6 = \underline{\quad}$

54

5 MULTIPLY OR DIVIDE?

MULTIPLY OR DIVIDE?

Do you need to multiply or divide to solve the word problem? Write the operation and record your answer.



MULTIPLY OR DIVIDE? A

The bakery has a total of 7 dozen chocolate chip cookies. How many chocolate chip cookies do they have?



MULTIPLY OR DIVIDE? B

The swimmer swam 98 laps in a week. She swam the same number of laps each day of the week. How many laps did she swim on Tuesday?



6 QUOTIENT SORT

QUOTIENT SORT

Sort the equation under the correct quotient. Write the equations in the chart in your recording book.

18

24

18

36

$162 \div 9 =$

$288 \div 8 =$

$72 \div 4 =$

$180 \div 5 =$

Each center has a fun and engaging way for students to review their math skills



5 MULTIPLY OR DIVIDE?

MULTIPLY OR DIVIDE?

Do you need to multiply or divide to solve the word problem? Write the operation in the recording book.



MULTIPLY OR DIVIDE? C

There were 135 kids at soccer sign ups. If each team has nine players, how many teams will there be?

MULTIPLY OR DIVIDE? D

There are 24 rows of seats on the airplane. If each row has six passengers, how many passengers are there on the plane?



Center 5

6 QUOTIENT SORT

18

24

QUOTIENT SORT

Sort the equation under the correct quotient. Write the equations in the chart in your recording book.



36

24

$$252 \div 7 =$$

$$168 \div 7 =$$

$$108 \div 3 =$$

$$192 \div 8 =$$

Black and white versions of each center also included