

VOCABULARY

Match the vocabulary term with the correct definition. Record the answers in your book.



quarter after



15 minutes after



12:00 p.m.



noon

YOUR TIME

What time do you do each of the activities?

YOUR TIME B

What time do you get up in the morning?



Center 8

TIME & ELAPSED TIME MATH CENTERS



DRAW THE CLOCK

Draw the hands on the clocks in your recording book to match the digital times on the cards.



Center 3

A.

3:35



B.

6:55



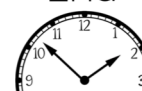
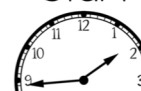
HOW MANY MINUTES?

How many minutes pass between the start and end time? Match the minutes to the clocks and



A. Start

End



C. Start

End



8

minutes



26

minutes



19

minutes




WORD PROBLEM A

The cake needs to bake for 45 minutes. Mom put it in the oven at 8:10. What time will the cake be done baking?



Center 2

1 MATH JOURNAL



MATH JOURNAL

Read the question carefully.
Use words, numbers and
pictures to show your answer.
Be sure to write in

Independent reading time
starts at 9:35 and ends at 9:58.

How many minutes is
independent reading time?

Draw a picture
and explain the strategy
you used to solve.



Center 1



A constructive response math journal prompt is included. The question asks students to use a picture and explain the reasoning for their answer.

CLOCKS


Match the analog clocks with the digital times that the clocks show. Record in your book.




4 CLOCKS

A.	B.	C.
		F.


CLOCK F



CLOCK G



CLOCK E



8:23

12:47

4:41



Several different matching sorts are included

9 WHAT TIME IS IT?

A.

B.

C.

WHAT TIME IS IT?

Write the correct digital time for each card in your book.



A. 10 minutes past 3:25



D. 20 minutes before 5:50



C. 15 minutes past 2:45



B. 5 minutes before 10:30

7 ONE MINUTE

A.

B.

ONE MINUTE

Use the timer to measure how many times you can complete the activities on the cards in just one minute.



CARD A

How many times can you snap your fingers in one minute?



CARD D

How many jumping jacks can you do in one minute?



CARD B

How many times can you write your first name in one minute?



Center 7

Each center has a fun and engaging way for students to review their math skills

9 WHAT TIME IS IT?

A.

B.

C.

WHAT TIME IS IT?

Write the correct digital time for each card in your book.



E. 30 minutes after 1:15



F. 25 minutes before 4:30



G. 50 minutes after 7:00



H. 50 minutes before 7:00



7 ONE MINUTE

A.

B.

ONE MINUTE

Use the timer to measure how many times you can complete the activities on the cards in just one minute.



CARD C

How many times can you whisper your ABCs in one minute?



CARD E

How high can you count by 2s in one minute?



CARD F

How many hearts can you draw in one minute?



Center 7