


QUADRILATERALS


Match the shape to its correct name. Record your answers in your book.



CARD 1




CARD 3



rhombus

rectangle

_____'s GEOMETRY MATH CENTERS



Student recording book designed to save paper and allows student choice to complete the ten centers in any order they wish.

2 VOCABULARY

A. Quadrilateral	
B. Parallel Lines	
C.	



A. Quadrilateral



a shape with four sides



C. Right Angle



an angle of 90 degrees such as the corner of a square

Match the vocabulary word to the correct definition.
Record the definitions in your book.



Center 2



Several different matching sorts are included

MYSTERY SHAPE

Read the clues and determine which shape is being described. Record the shapes in your book.



3 MYSTERY SHAPES

A

B

MYSTERY SHAPE A

I am a four-sided shape. All of my sides are equal in length. I have four right angles. What shape am I?

Center 3



MYSTERY SHAPE B

I am a quadrilateral. I have one set of parallel lines and one set of set of lines that are equal in length. What shape am I?

Center 3



Each center has a fun and engaging way for students to review their math skills

MYSTERY SHAPE

Read the clues and determine which shape is being described. Record the shapes in your book.



3 MYSTERY SHAPES

A

B

MYSTERY SHAPE C

I have two sets of parallel lines. All four of my sides are equal and I do not have any right angles. What shape am I?

Center 3



MYSTERY SHAPE D

I am a four-sided shape. I have four right angles and my sides are not all equal to each other. What shape am I?

Center 3

